




Name: \_\_\_\_\_

# TEN-FRAMES






## St. patrick's Day Dinosaurs

Directions: complete the ten-frame to make 10. complete the number sequence.












\_\_\_\_\_ + \_\_\_\_\_ = 10





\_\_\_\_\_ + \_\_\_\_\_ = 10







\_\_\_\_\_ + \_\_\_\_\_ = 10








\_\_\_\_\_ + \_\_\_\_\_ = 10










\_\_\_\_\_ + \_\_\_\_\_ = 10

\_\_\_\_\_ + \_\_\_\_\_ = 10

\_\_\_\_\_ + \_\_\_\_\_ = 10


\_\_\_\_\_ + \_\_\_\_\_ = 10

Name: \_\_\_\_\_


# MAKING FIVE

## St. Patrick's Day Dinosaurs


Directions: complete the ten-frame to make 5. complete the number sequence.




$$\underline{\quad\quad} + \underline{\quad\quad} = 5$$




$$\underline{\quad\quad} + \underline{\quad\quad} = 5$$



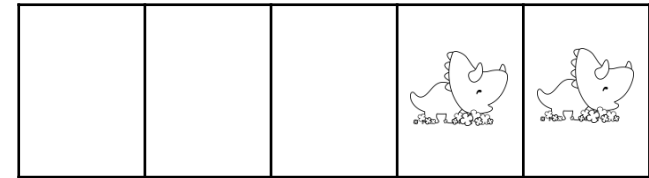
$$\underline{\quad\quad} + \underline{\quad\quad} = 5$$




$$\underline{\quad\quad} + \underline{\quad\quad} = 5$$




$$\underline{\quad\quad} + \underline{\quad\quad} = 5$$



$$\underline{\quad\quad} + \underline{\quad\quad} = 5$$



$$\underline{\quad\quad} + \underline{\quad\quad} = 5$$



$$\underline{\quad\quad} + \underline{\quad\quad} = 5$$